

# 2-D Shapes Test

Write the 2-D shapes name using word bank below.  
Count the corners and edges.  
Colour the shapes.

## Word Banks

triangle


hexagon

square

rectangle

octagon

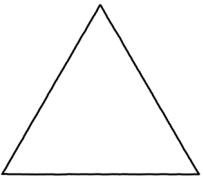
Name of the shape \_\_\_\_\_



How many corners \_\_\_\_\_

How many edges \_\_\_\_\_


Name of the shape \_\_\_\_\_



How many corners \_\_\_\_\_

How many edges \_\_\_\_\_

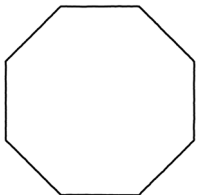
Name of the shape \_\_\_\_\_



How many corners \_\_\_\_\_

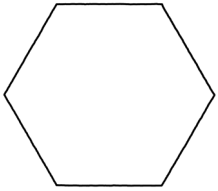
How many edges \_\_\_\_\_

Name of the shape \_\_\_\_\_



How many corners \_\_\_\_\_

How many edges \_\_\_\_\_



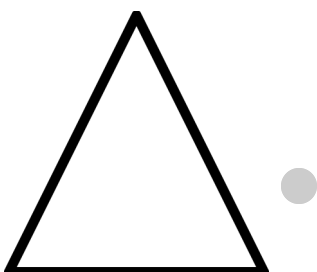

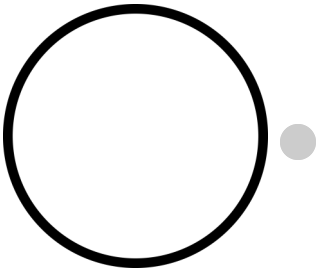
Name of the shape \_\_\_\_\_

How many corners \_\_\_\_\_

How many edges \_\_\_\_\_

Draw a line to connect 2-D Shape to match 3-D shapes.

2-D Shapes



3-D Shapes

