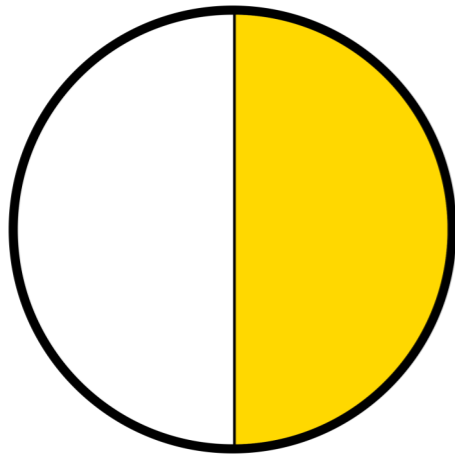
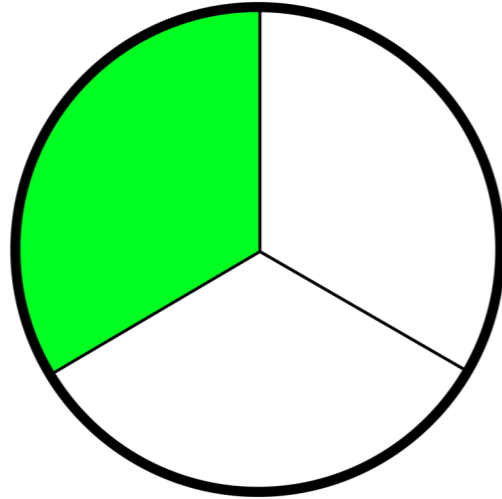


Identify Fractions Shapes

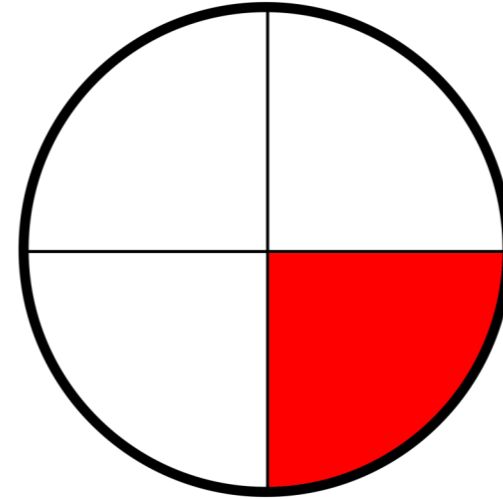
What fraction of the shapes is shaded, and circle the correct answer.



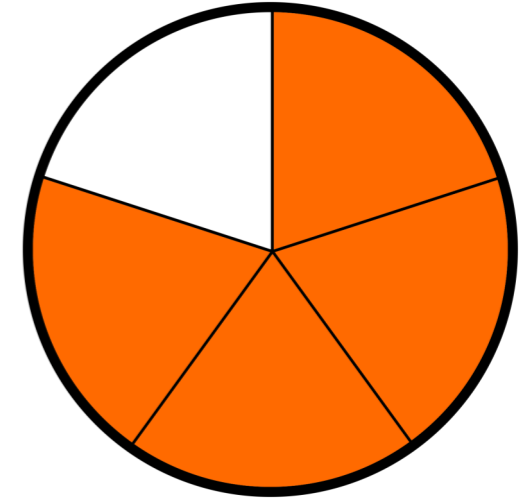
$\frac{1}{4}$ $\frac{1}{2}$ $\frac{1}{6}$



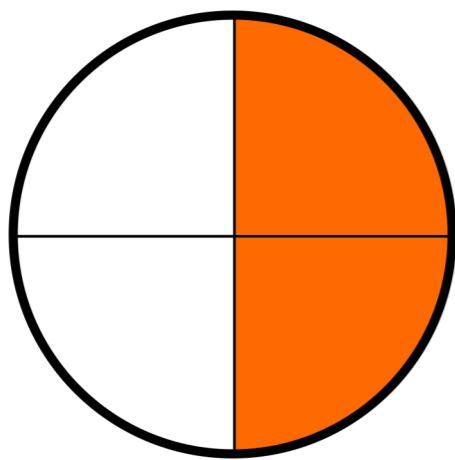
$\frac{1}{2}$ $\frac{1}{3}$ $\frac{1}{4}$



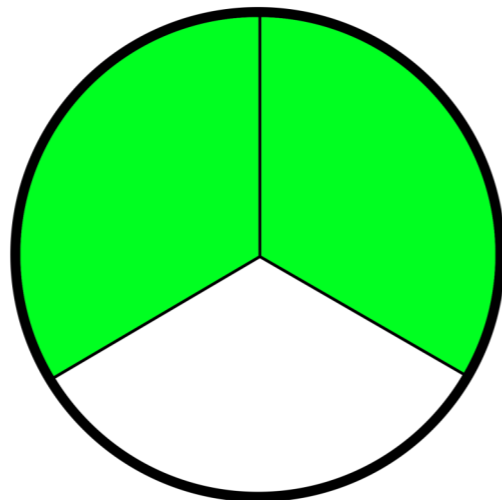
$\frac{1}{4}$ $\frac{2}{4}$ $\frac{3}{4}$




$\frac{2}{3}$ $\frac{3}{4}$ $\frac{4}{5}$




$\frac{2}{3}$ $\frac{2}{4}$ $\frac{1}{4}$



$\frac{3}{3}$ $\frac{1}{6}$ $\frac{2}{3}$



$\frac{1}{4}$ $\frac{2}{4}$ $\frac{3}{4}$



$\frac{4}{5}$ $\frac{4}{6}$ $\frac{4}{8}$