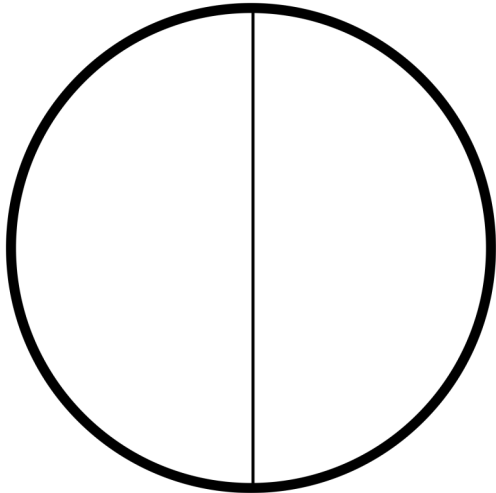
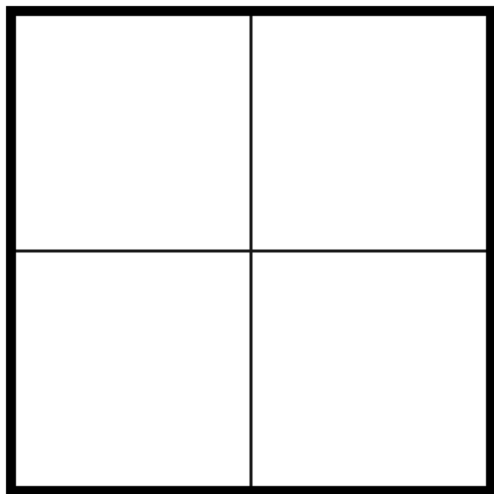


Identifying Fraction

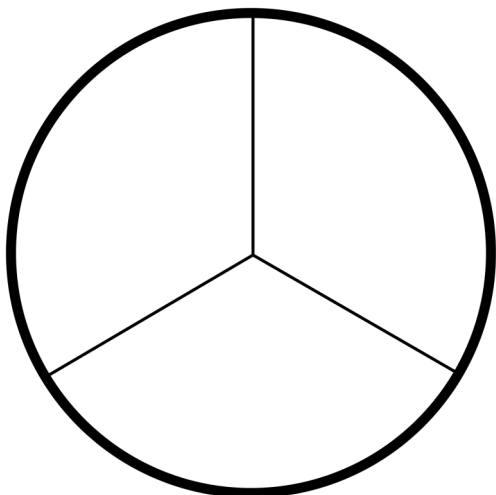
- Circle the correct fractions.
- Colour the fractions.




1	1	1
—	—	—
2	3	4




1	1	1
—	—	—
2	3	4




1	1	1
—	—	—
2	3	4




$$\begin{array}{r} 1 \quad 2 \quad 1 \\ \hline 2 \quad 3 \quad 4 \end{array}$$



$$\begin{array}{r} 1 \quad 2 \quad 1 \\ \hline 2 \quad 3 \quad 4 \end{array}$$



$$\begin{array}{r} 1 \quad 1 \quad 1 \\ \hline 2 \quad 3 \quad 4 \end{array}$$



$$\begin{array}{r} 1 \quad 1 \quad 1 \\ \hline 2 \quad 3 \quad 4 \end{array}$$