

Which Shape Is It

Name the shapes. How many sides and corners.

square

triangle


rectangle

circle



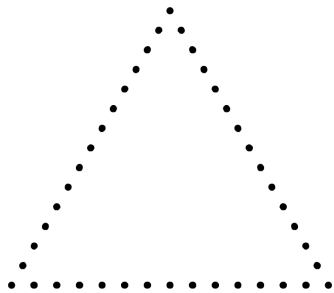
Name

_____ sides _____ corners



Name

_____ sides _____ corners



Name




_____ sides _____ corners



Name

_____ sides _____ corners

Match the shapes



square

circle

rectangle

triangle